

Maths Year 3

Week beginning Monday 27th April.


This week our learning is going to focus on

- making sure we know the 3, 4 and 8 times tables
- working out what the number rule is and finding the missing numbers.
- Looking at bar charts and graphs to use the knowledge we have learnt.

Have a go at these activities during the Maths slot time on the time table.

Remember if you finish keep on with hit the button, times table rockstars, practicing all the formal methods for addition, subtraction, multiplication and division. Examples of each are on the class blog page.

You can do this Meerkat Mathematicians.



Activities to complete.

- Mathematics - I have set particular tasks for you to complete.
- Work out the missing numbers - this grid is for the 4x table.

$4 \div 4 = ?$	$8 \div ? = 4$	$? \times 4 = 12$
$16 \div 4 = ?$	$4 \times ? = 20$	$? \times 4 = 24$
$28 \div ? = 4$	$4 \times ? = 32$	$36 \div ? = 4$
$? \times 4 = 40$	$44 \div ? = 4$	$4 \times ? = 48$

- What are the missing numbers.

0 , 8 , _____ , 24 , 32 , _____ , _____ , 56 , _____ ,

_____ , 400 , 450 , _____ , 550

3 , _____ , _____ , 15 , 19 , _____ , 27

65 , 59 , 53 , _____ , _____ , 35 , 29

- What could the missing numbers be? Is there more than one possible answer to each question.

$$\bigcirc \times \square = 48$$

$$\bigcirc \times \square = 24$$





$$\bigcirc \times \square = 64$$

In class we have used loop game cards to help us practise our times tables. Have a go at making some of your own for the different times tables.

2x3	6	5x3	15	9x3	27	1x3
21	Complete the loop by matching the calculation to its answer.					3
7x3						3x3
12						9
4x3	24	8x3	30	10x3	18	6x3

- Have a look at this pictogram. It shows the number of ice creams sold in 1 day.

Work out the answers to the questions underneath.

vanilla	
strawberry	
chocolate	
mint choc chip	

Important  stands for 8 ice creams.

- 1 How many mint choc chip ice creams were sold?
- 2 How many more chocolate ice creams were sold than strawberry ice creams?
- 3 How many fewer mint choc chip ice creams were sold than Vanilla?
- 4 How many ice creams were sold altogether?